

NAME: \_\_\_\_\_

## Purpose

To find the difference between two numbers

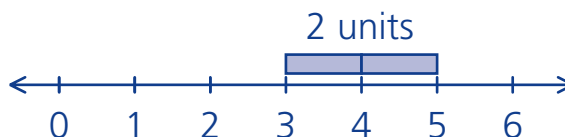
## Math Words

**difference between**

Since I am 2 years older than my sister, the difference between our ages is 2 years.

**find the difference**

To find the difference between 5 and 3, find how much more 5 is than 3.



**difference**

The difference is the answer you get when you subtract.

### Starter Problem

Adam has 11 toy trains. Marcos has 8 toy trains. What is the difference between the number of trains Adam has and the number of trains Marcos has? \_\_\_\_\_

NAME: \_\_\_\_\_

## Starter Problem

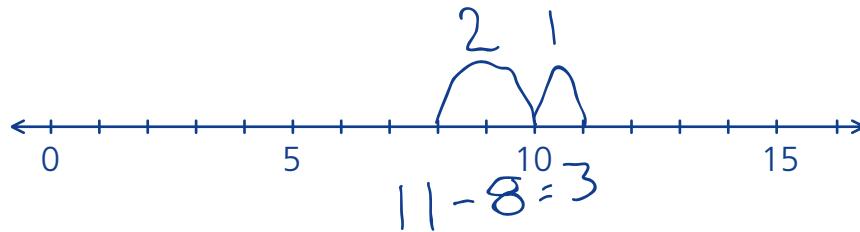
Adam has 11 toy trains. Marcos has 8 toy trains. What is the difference between the number of trains Adam has and the number of trains Marcos has? \_\_\_\_\_

## Student Thinking



Dan

To find the difference, I started with Marcos' trains and counted up 3 units between 8 and 11. It's easier to count up in easy steps than to take away in this problem. The difference is 3.



Olivia

I counted up from 8 to 11. There are 4 numbers: 8, 9, 10, 11. The difference is 4.



8, 9, 10, 11       $11 - 8 = 4$

## Things to Remember

\*

\_\_\_\_\_

\*

\_\_\_\_\_



NAME: \_\_\_\_\_

## Our Turn

Find the difference. Use the number line to help you.

1. Eva's bean plant is 17 inches tall. Sophia's bean plant is 9 inches tall. Find the difference between the heights of Eva's and Sophia's plants. \_\_\_\_\_



2. 
$$\begin{array}{r} 21 \\ -18 \\ \hline \end{array}$$



3. Find the difference between 20 and 5. \_\_\_\_\_

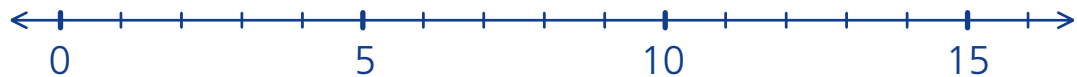


NAME: \_\_\_\_\_

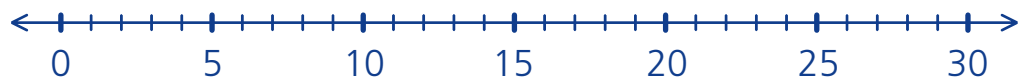
## My Turn

Find the difference. Use the number line to help you.

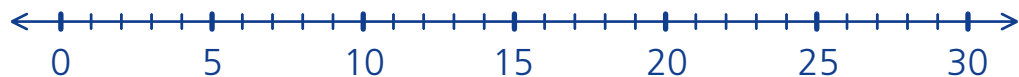
- Avery is 13 years old. His little brother, Tom, is 9 years old.  
Find the difference in their ages. \_\_\_\_\_



$$\begin{array}{r} 21 \\ - 17 \\ \hline \end{array}$$



- Find the difference between 25 and 19. \_\_\_\_\_



NAME: \_\_\_\_\_

**Multiple Choice Mini Lesson**

Fill in the circle next to the answer you choose.

1. Aida has 10 stuffed animals. Marta has 7 stuffed animals. Find the difference between the number of stuffed animals Aida has and the number of stuffed animals Marta has.

☐ 17☐ 7☐ 3

2. Find the difference.

$$\begin{array}{r} 31 \\ - 25 \\ \hline \end{array}$$

☐ 6☐ 4☐ 14

NAME: \_\_\_\_\_

**Multiple Choice Mini Lesson**

Fill in the circle next to the answer you choose.

1. Aida has 10 stuffed animals. Marta has 7 stuffed animals. Find the difference between the number of stuffed animals Aida has and the number of stuffed animals Marta has.

☐ 17☐ 7☐ 3

2. Find the difference.

$$\begin{array}{r} 31 \\ - 25 \\ \hline \end{array}$$

☐ 6☐ 4☐ 14

NAME:

## Writing Task Mini Lesson

Explain how to find the difference between 15 and 7. You may make a drawing to help you explain.

---

---

---

---

---



NAME:

## Writing Task Mini Lesson

Explain how to find the difference between 15 and 7. You may make a drawing to help you explain.

---

---

---

---

---